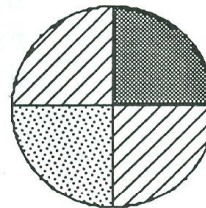


SUNSHINE MATH - 2
Earth, XIII

Name: _____

(This shows my own thinking.)

- ★★ 1. If you throw a dart at this dartboard, what is the chance you will land on stripes? Write the answer as a fraction.



Answer: My chance is

- ★★★ 2. Read the list of numbers. Choose only the *even* numbers and add them together. What is the sum?

fourteen	eleven	eighty-eight
thirty-seven	one hundred	sixteen
twenty-nine	forty-three	

Answer: _____

- ★★ 3. Complete the addition problems. Write numbers in the boxes.

$$\begin{array}{r} \text{a.} \quad 3 \square 2 \\ + \square 0 \square \\ \hline 6 \ 5 \ 3 \end{array}$$


$$\begin{array}{r} \text{b.} \quad \square 2 \square \\ + 2 \square 3 \\ \hline 7 \ 6 \ 8 \end{array}$$

- ★ 4. Carolla is older than Tremaine. Carolla is younger than James. Who is the oldest?

Answer: _____



- ★★★★ 5. Mickey Mouse asked 16 kids how many glasses of milk they drink each day. He then made this line plot. Answer the questions below.




Key: X means 1 kid

- a. How many kids drink 1 glass of milk each day?
Answer: _____ kids
- b. Four kids drink 2 glasses of milk each day. How many total glasses of milk is this each day?
Answer: _____ glasses
- c. Five kids drink 3 glasses of milk each day. How many total glasses of milk is this each day?
Answer: _____ glasses
- d. How many total glasses of milk do all 16 kids drink each day?
Answer: _____ glasses

- ★ 6. How many ounces of plant food does Marcus need to mix with 3 gallons of water?

Answer: _____ ounces



Directions
Mix 2 ounces
with 1 gallon
of water